


Key Signatures in BASS Clef

Use pencil. Write neatly.
Read flats and sharps from left to right.
Name each flat and sharp in the key signature.
USE Capital Letters,


Name _____

Class Period _____


1 F MAJOR




2 B^b MAJOR




3 E^b MAJOR




4 A^b MAJOR




5 D^b MAJOR




6 G^b MAJOR




7 C^b MAJOR




8 G MAJOR




9 D MAJOR




10 A MAJOR




11 E MAJOR




12 B MAJOR



13 F# MAJOR



14 C# MAJOR



Major Scale Spelling

Name _____

Class Period _____

Write in the names of each scale tone in the boxes provided. Write neatly. Use a pencil.

C Major								
F Major								
Bb Major								
Eb Major								
Ab Major								
Db Major								
Gb Major								
Cb Major	Cb	Db	Eb	Fb	Gb	Ab	Bb	Cb
G Major								
D Major								
A Major								
E Major								
B Major								
F# Major	F#	G#	A#	B	C#	D#	E#	F#

Suggestion: Write the note names of the scales first and then add the flats and sharps as needed. Use your musical alphabet. (A B C D E F G A B C D E F G)

